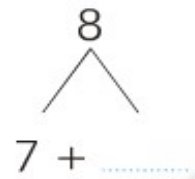
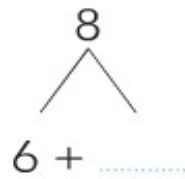
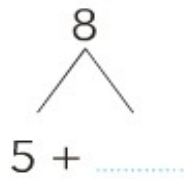
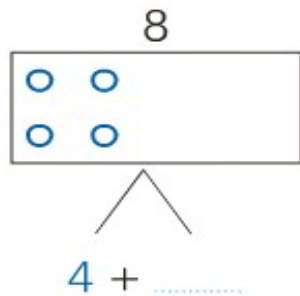
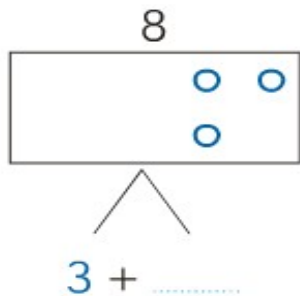
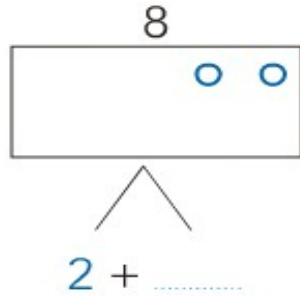
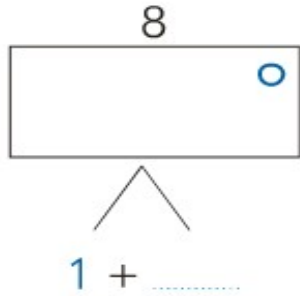


Exercices complémentaires - Séquence 43 page 58

Complète en imaginant les points :



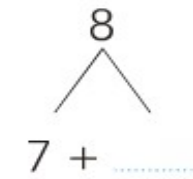
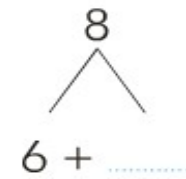
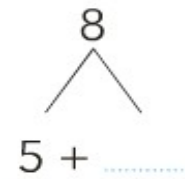
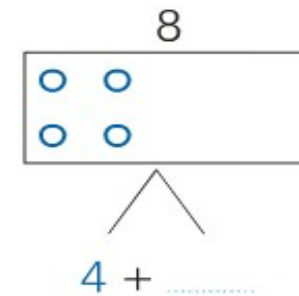
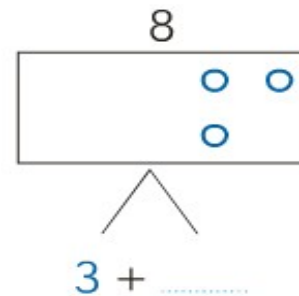
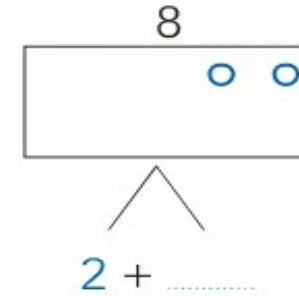
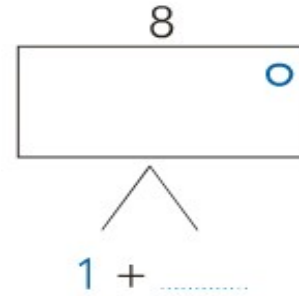
Écris la table des moitiés :

2 = ..... + .....      4 = ..... + .....      6 = ..... + .....

8 = ..... + .....      10 = ..... + .....

Exercices complémentaires - Séquence 43 page 58

Complète en imaginant les points :



Écris la table des moitiés :

2 = ..... + .....      4 = ..... + .....      6 = ..... + .....

8 = ..... + .....      10 = ..... + .....