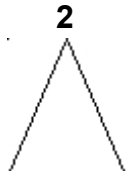


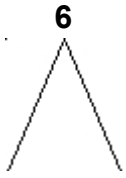
Exercices complémentaires - Séquence 37 page 51
 Complète pour trouver les moitiés de chaque nombre :



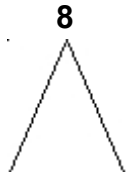
1 +



2 +



..... +

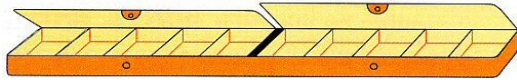


..... +




..... +

Complète la table des doubles :



1 + 1 = 

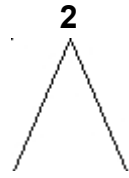
2 + 2 = 

3 + 3 = 

4 + 4 = 

5 + 5 = 

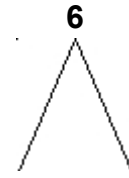
Exercices complémentaires - Séquence 37 page 51
 Complète pour trouver les moitiés de chaque nombre :



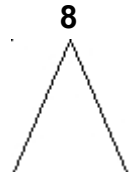
1 +



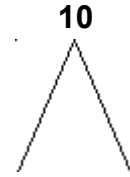
2 +



..... +

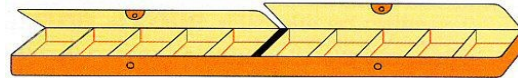


..... +





..... +

Complète la table des doubles :



1 + 1 = 

2 + 2 = 

3 + 3 = 

4 + 4 = 

5 + 5 = 